









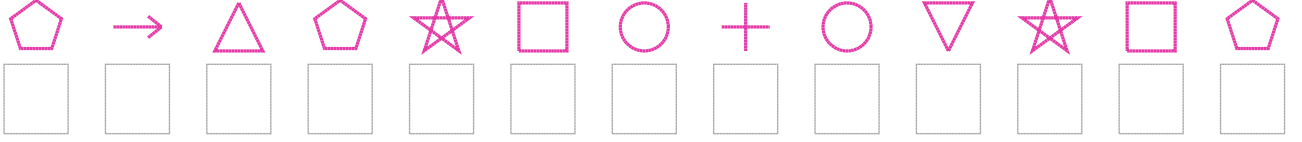


Şekil Sayı Eşleştirme


 = 5	 = 8	 = 0	 = 3	 = 7	 = 1	 = 6	 = 4	 = 2	 = 9
--	--	--	--	--	--	---	--	--	--

Aşağıdaki uzun şifreleri hatasız çözerek altlarına yazın:

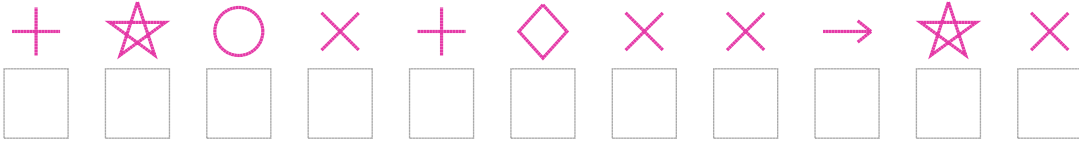
1. Şifre



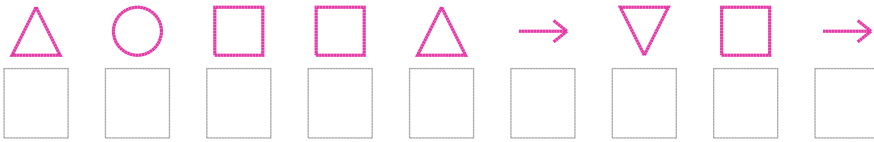
2. Şifre




3. Şifre



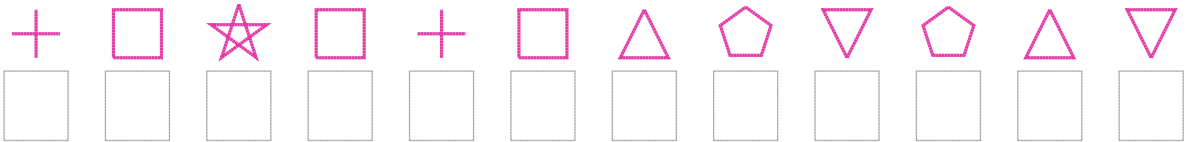
4. Şifre




5. Şifre



6. Şifre



7. Şifre



□ BONUS: 3. ve 1. şifrenin üçüncü rakamının toplamı kaçtır?

Cevap Anahtarı

1. Şifre: 8148527673528

2. Şifre: 4542725240458

3. Şifre: 65706900150

4. Şifre: 472241321

5. Şifre: 918850901

6. Şifre: 625262483843

7. Şifre: 08766585116

□ Bonus Soru Cevabı: 11